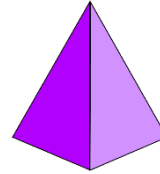
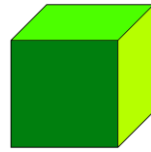
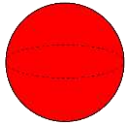


1. Draw a line to match each of the 3D shapes to its name.



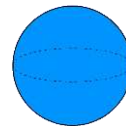
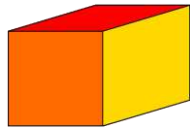
cylinder

cube

pyramid

sphere

2. Draw a line to match each of the 3D shapes to its name.



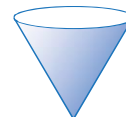
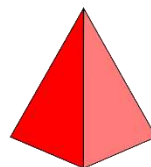
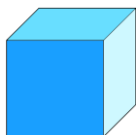
cuboid

sphere

cone

cylinder

3. Draw a line to match each of the 3D shapes to its name.



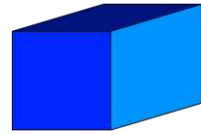
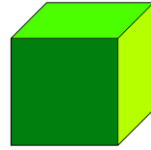
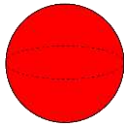
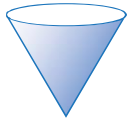
pyramid

cone

cylinder

cube

1. Draw a line to match each of the 3D shapes to its name.



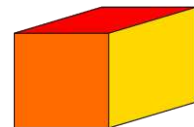
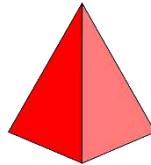
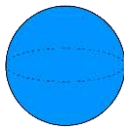
cube

cuboid

cone

sphere

2. Draw a line to match each of the 3D shapes to its name.



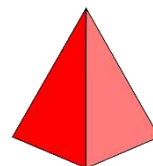
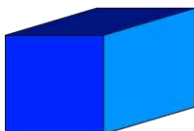
pyramid

cylinder

cuboid

sphere

3. Draw a line to match each of the 3D shapes to its name.



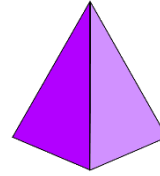

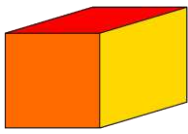
cuboid

cone

pyramid

cylinder

1. Draw a line to match each of the 3D shapes to its name.



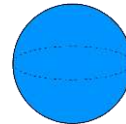
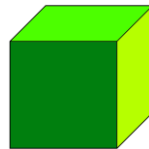
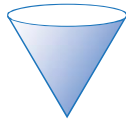
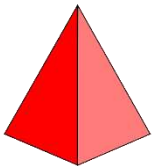
sphere

pyramid

cylinder

cuboid

2. Draw a line to match each of the 3D shapes to its name.



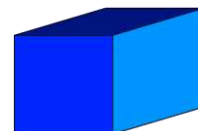
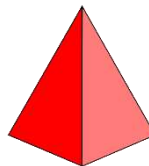
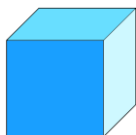
cone

cube

sphere

pyramid

3. Draw a line to match each of the 3D shapes to its name.



cube

cylinder

cuboid

pyramid

Answers:

Page 1

Naming 3D shapes
Maths worksheets from urbrainy.com

1. Draw a line to match each of the 3D shapes to its name.

2. Draw a line to match each of the 3D shapes to its name.

3. Draw a line to match each of the 3D shapes to its name.

Page 1

Page 2

Naming 3D shapes
Maths worksheets from urbrainy.com

1. Draw a line to match each of the 3D shapes to its name.

2. Draw a line to match each of the 3D shapes to its name.

3. Draw a line to match each of the 3D shapes to its name.

Page 2

Page 3

Naming 3D shapes
Maths worksheets from urbrainy.com

1. Draw a line to match each of the 3D shapes to its name.

2. Draw a line to match each of the 3D shapes to its name.

3. Draw a line to match each of the 3D shapes to its name.

Page 3

Name:

Page 4