




Draw a tractor around the clock which shows half past ten.

Draw a castle around the clock which shows half past one.

Draw a fish around the clock that shows four o'clock.

Draw a flower around the clock that shows twelve o'clock.

I have done the first one for you.




Draw a cat around the clock which shows seven o'clock.

Draw a house around the clock which shows half past eleven.

Draw a star around the clock that shows half past five.

Draw a bicycle around the clock that shows nine o'clock.



Telling the time – draw a picture around the clock

Maths worksheets from urbrainy.com



Draw a dog around the clock which shows half past nine.

Draw a train around the clock which shows half past six.

Draw a boat around the clock that shows two o'clock.

Draw a bus around the clock that shows eleven o'clock.

