


Read the time to the half hour (3)

Maths worksheets from urbrainy.com






Help me to match the clocks to the times they show.
I have done the first one for you.

five o'clock

half past six



half past seven




ten o'clock

twelve o'clock

half past one








Help me to match the clocks to the times they show.

half past eleven

half past four




two o'clock




one o'clock

three o'clock

eight o'clock








Help me to match the clocks to the times they show.

half past nine

half past two



eleven o'clock



seven o'clock

half past five

half past three



Answers:

Page 1

Read the time to the half hour (3)
Maths worksheets from urbrainy.com

Help me to match the clocks to the times they show.
I have done the first one for you.

five o'clock half past six half past seven

ten o'clock twelve o'clock half past one

Name: _____ Page 1

Page 2

Read the time to the half hour (3)
Maths worksheets from urbrainy.com

Help me to match the clocks to the times they show.

half past eleven half past four two o'clock

one o'clock three o'clock eight o'clock

Name: _____ Page 2

Page 3

Read the time to the half hour (3)
Maths worksheets from urbrainy.com

Help me to match the clocks to the times they show.

half past nine half past two eleven o'clock

seven o'clock half past five half past three

Name: _____ Page 3