






Please help me to match the clocks to the time they show.  
I have done the first one for you.



half past eleven




half past three




half past seven



Please help me to match the clocks to the time they show.



half past ten




half past five




half past two




Please help me to match the clocks to the time they show.



half past four




half past twelve




half past eight




Please help me to match the clocks to the time they show.



half past one



half past nine



half past six

Answers:

Page 1

Read the time to the half hour (2)  
Maths worksheets from urbrainy.com

Please help me to match the clocks to the time they show.  
I have done the first one for you.

half past eleven

half past three

half past seven

Name: \_\_\_\_\_ Page 1

Page 2

Read the time to the half hour (2)  
Maths worksheets from urbrainy.com

Please help me to match the clocks to the time they show.

half past ten

half past five

half past two

Name: \_\_\_\_\_ Page 2

Page 3

Read the time to the half hour (2)  
Maths worksheets from urbrainy.com

Please help me to match the clocks to the time they show.

half past four

half past twelve

half past eight

Name: \_\_\_\_\_ Page 3

Page 4

Read the time to the half hour (2)  
Maths worksheets from urbrainy.com

Please help me to match the clocks to the time they show.

half past one

half past nine

half past six

Name: \_\_\_\_\_ Page 4

Name: \_\_\_\_\_

Page 5