
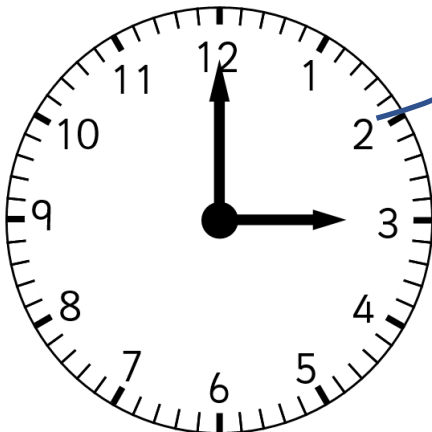





Please help me to match the clocks to the time they show.
I have done the first one for you.



Three o'clock




8 o'clock




4 o'clock




Please help me to match the clocks to the time they show.



9 o'clock



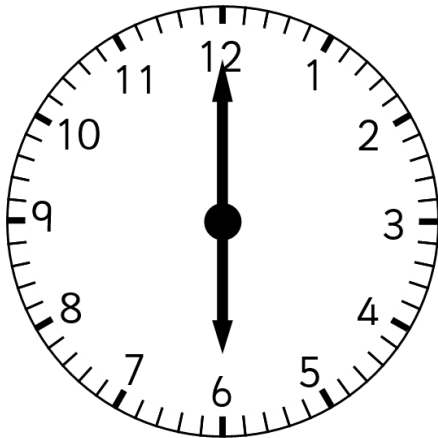
one o'clock




five o'clock




Please help me to match the clocks to the time they show.



six o'clock




2 o'clock




11 o'clock




Please help me to match the clocks to the time they show.



seven o'clock



ten o'clock



12 o'clock

Answers:

Page 1

Read the time (2)
Maths worksheets from urbrainy.com

Please help me to match the clocks to the time they show.
I have done the first one for you.

Three o'clock

8 o'clock

4 o'clock

Name: _____ Page 1

Page 2

Read the time (2)
Maths worksheets from urbrainy.com

Please help me to match the clocks to the time they show.

9 o'clock

one o'clock

five o'clock

Name: _____ Page 2

Page 3

Read the time (2)
Maths worksheets from urbrainy.com

Please help me to match the clocks to the time they show.

six o'clock

2 o'clock

11 o'clock

Name: _____ Page 3

Page 4

Read the time (2)
Maths worksheets from urbrainy.com

Please help me to match the clocks to the time they show.

seven o'clock

ten o'clock

12 o'clock

Name: _____ Page 4

Name: _____

Page 5